


Name _____

Date _____

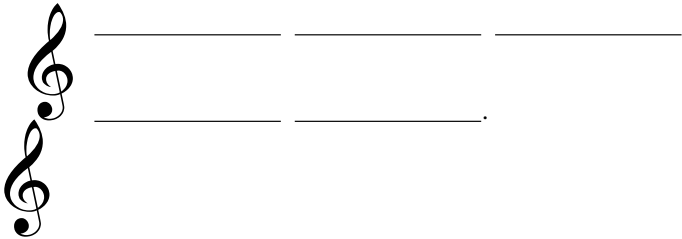
Period _____

Beginning Band/Orchestra Test 1

1. What are the two names for this clef?




2. What is the sentence for line notes in this clef?



3. There's a _____ in the space (in this clef).

4. Write in all the letter names on each line and space in this clef.



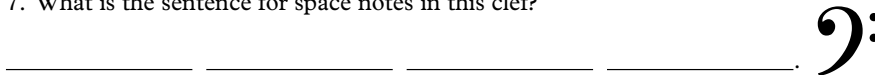
5. What are the two names for this clef?




6. What is the sentence for line notes in this clef?



7. What is the sentence for space notes in this clef?



8. Write in all the letter names on each line and space in this clef.

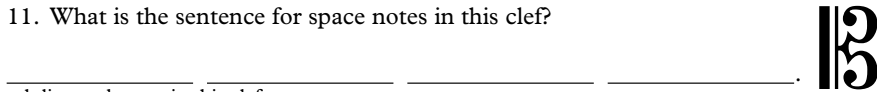


9. What are the two names for this clef?


10. What is the made up word for line notes in this clef?



11. What is the sentence for space notes in this clef?



12. Write in all the letter names on each line and space in this clef.




13-15. Write in the LETTER NAME of each note.
PAY ATTENTION TO THE CLEF.

13. ____

14. ____

15. ____



16. Fill in the chart with the correct notes, rests, and counts:

Name	Note	Counts	Rest
------	------	--------	------

Whole			
-------	--	--	--

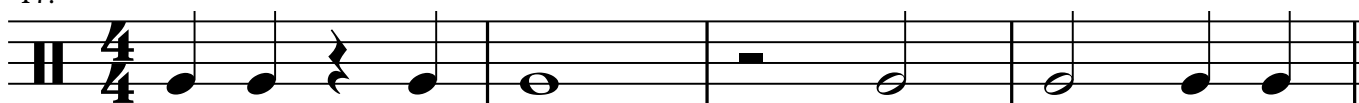
Half			
------	--	--	--

Quarter			
---------	--	--	--

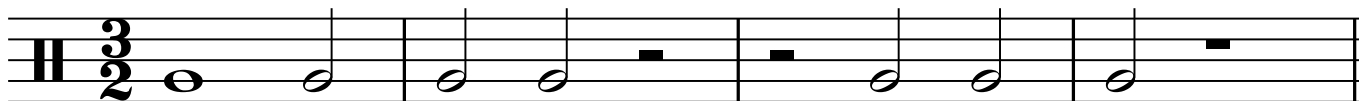
Eighth			
--------	--	--	--

Write in the counting on the following rhythms:

17.



18.



19.

